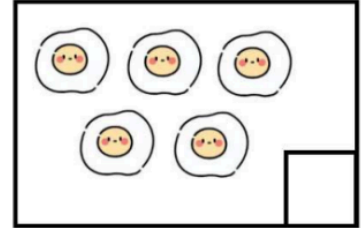




## ĐỀ KIỂM TRA GIỮA KÌ I – TOÁN 1 (BỘ KẾT NỐI TRI THỨC)


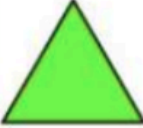


















**Câu 1. Số?**



**Câu 2. Điền số vào ô trống.**

9		7			4			1
---	--	---	--	--	---	--	--	---

**Câu 3. Tìm hình theo mẫu.**

<p><b>Mẫu</b></p> <div style="text-align: center;">  </div> <p>Hình tròn</p>				
<div style="text-align: center;">  </div> <p>Hình tam giác</p>				
<div style="text-align: center;">  </div> <p>Hình vuông</p>				
<div style="text-align: center;">  </div> <p>Hình chữ nhật</p>				

**Câu 4. Tính**

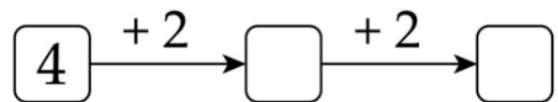
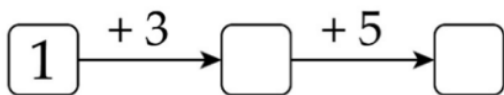
$$1 + 4 = \dots\dots\dots$$

$$3 + 2 + 1 = \dots\dots$$

$$7 + 1 = \dots\dots\dots$$

$$5 + 3 + 1 = \dots\dots\dots$$

**Câu 5. Số?**



**Câu 6. Số?**

6 bông hoa gồm ... bông hoa và 4  
bông hoa.



Câu 7. Khoanh tròn vào số lượng nhiều hơn trong mỗi hình sau:

